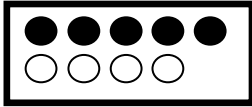


PL7 **Úloha č. 1** Vypočítaj a znázorni príklady na sčítanie +

$5 + 4 =$



$6 + 3 =$



$7 + 2 =$



$2 + 3 =$



$5 + 5 =$

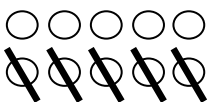


$4 + 1 =$



**Úloha č. 2** Vypočítaj a znázorni príklady na odčítanie –

$10 - 5 =$



$8 - 2 =$

$9 - 5 =$

$7 - 5 =$

$3 - 1 =$

$6 - 3 =$


$5 - 3 =$

$8 - 7 =$




$10 - 10 =$

**Úloha č. 3** Dokresli, zapíš a porovnaj (>, <, =) počet predmetov


5






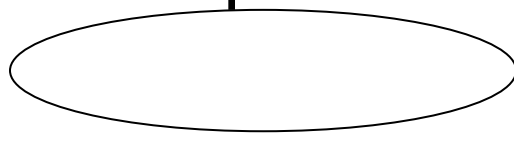
5



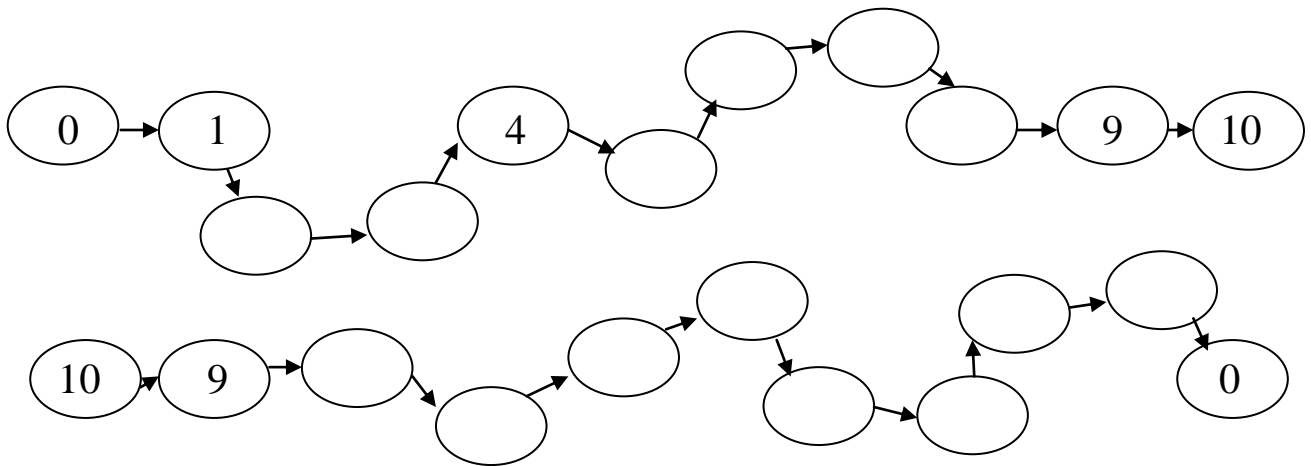
9



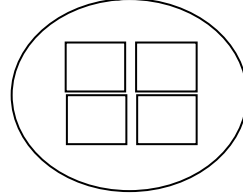
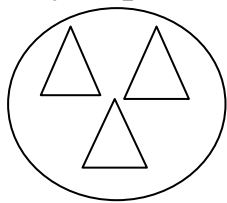
6





PL8 **Úloha č. 1** Dopln číselné rady



**Úloha č. 2** Spočítaj, urči a zapíš koľko predmetov je na obrázkoch a zisti ktorých predmetov je viac > alebo menej <










**Úloha č. 3** Zapíš a porovnaj (>, <, =) počet predmetov

